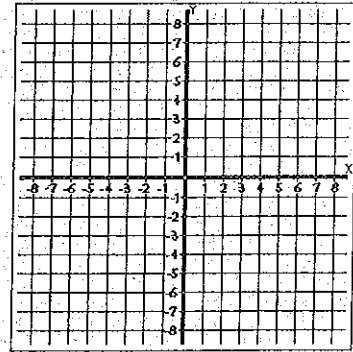


Graph each of the following quadratic equations by first completing the table of values.

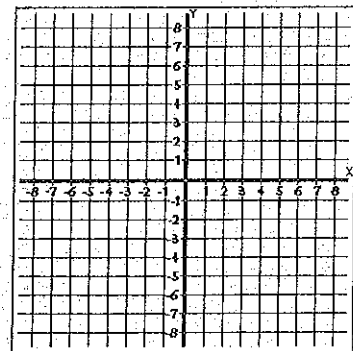
1.  $y = x^2 + 1$

$x$	$y$
-3	
-2	
-1	
0	
1	
2	
3	



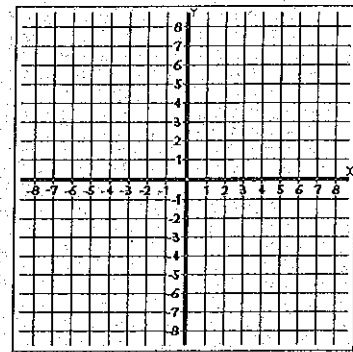
2.  $y = x^2 - 4$

$x$	$y$
-3	
-2	
-1	
0	
1	
2	
3	



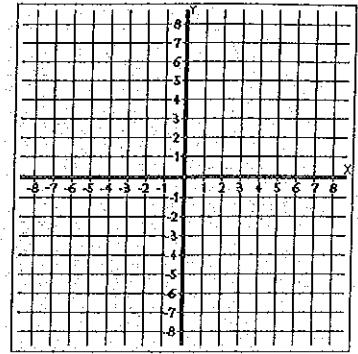
3.  $y = x^2 - 4x$

$x$	$y$



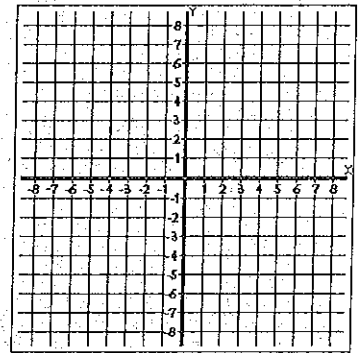
4.  $y = x^2 - 2x - 3$

$x$	$y$



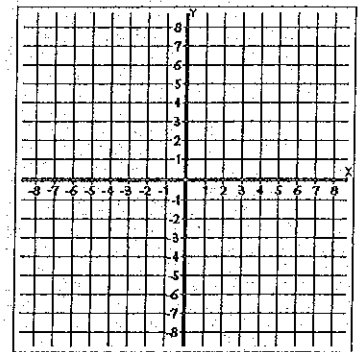
5.  $y = x^2 - x - 6$

$x$	$y$



6.  $y = -x^2 - 4x$

$x$	$y$



7.  $y = -x^2 + 2x$

$x$	$y$

